



Please write clearly in block capitals.

Centre number

--	--	--	--	--

Candidate number

--	--	--	--

Surname

\_\_\_\_\_

Forename(s)

\_\_\_\_\_

Candidate signature

\_\_\_\_\_

I declare this is my own work.

# A-level MATHEMATICS

## Paper 2 **Model Solutions**

Wednesday 10 June 2020

Afternoon

Time allowed: 2 hours

### Materials

- You must have the AQA Formulae for A-level Mathematics booklet.
- You should have a graphical or scientific calculator that meets the requirements of the specification.

### Instructions

- Use black ink or black ball-point pen. Pencil should only be used for drawing.
- Fill in the boxes at the top of this page.
- Answer **all** questions.
- You must answer each question in the space provided for that question. If you need extra space for your answer(s), use the lined pages at the end of this book. Write the question number against your answer(s).
- Show all necessary working; otherwise marks for method may be lost.
- Do all rough work in this book. Cross through any work that you do not want to be marked.

### Information

- The marks for questions are shown in brackets.
- The maximum mark for this paper is 100.

### Advice

- Unless stated otherwise, you may quote formulae, without proof, from the booklet.
- You do not necessarily need to use all the space provided.

For Examiner's Use	
Question	Mark
1	
2	
3	
4	
5	
6	
7	
8	
9	
10	
11	
12	
13	
14	
15	
16	
17	
18	
19	
<b>TOTAL</b>	



J U N 2 0 7 3 5 7 2 0 1

**Section A**Answer **all** questions in the spaces provided.

- 1** Which one of these functions is decreasing for all real values of  $x$ ?

Circle your answer.

**[1 mark]**

$f(x) = e^x$

$f(x) = -e^{1-x}$

$f(x) = -e^{x-1}$

$f(x) = -e^{-x}$

- 2** Which one of the following equations has no real solutions?

Tick (✓) **one** box.**[1 mark]**

$\cot x = 0$

$\ln x = 0$

$|x + 1| = 0$

$\sec x = 0$



- 3 Find the coefficient of  $x^2$  in the binomial expansion of  $\left(2x - \frac{3}{x}\right)^8$

[3 marks]

$$(2x - 3x^{-1})^8 = (x^{-1}(2x^2 - 3))^8 = x^{-8}(2x^2 - 3)^8$$

To get the coefficient of  $x^2$ , we need to find the  $x^{10}$  coefficient of  $(2x^2 - 3)^8$

$$\text{Coefficient: } \binom{8}{5} (2)^5 (-3)^3 = -48384$$

Turn over for the next question

Turn over ►



- 4 Using small angle approximations, show that for small, non-zero, values of  $x$

$$\frac{x \tan 5x}{\cos 4x - 1} \approx A$$

where  $A$  is a constant to be determined.

[4 marks]

For small angles,  $\cos x \approx 1 - \frac{x^2}{2}$   
and  $\tan x \approx x$

So  $\cos 4x \approx 1 - 8x^2$  and  $\tan 5x \approx 5x$

$$\frac{x \tan 5x}{\cos 4x - 1} \approx \frac{x(5x)}{1 - 8x^2 - 1} \approx \frac{5x^2}{-8x^2} \approx -\frac{5}{8}$$

$$A = -\frac{5}{8}$$



**Turn over for the next question**

*Do not write  
outside the  
box*

**DO NOT WRITE ON THIS PAGE  
ANSWER IN THE SPACES PROVIDED**

**Turn over ►**



5 Use integration by substitution to show that

$$\int_{-\frac{1}{4}}^6 x\sqrt{4x+1} dx = \frac{875}{12}$$

Fully justify your answer.

[6 marks]

$$U = 4x + 1 \quad \frac{dU}{dx} = 4$$

$$x = \frac{1}{4}(U-1)$$

$$I = \int_{-\frac{1}{4}}^6 x\sqrt{4x+1} dx = \int_0^{25} \frac{1}{4}(U-1)U^{\frac{1}{2}} \frac{1}{4} dU$$

$$x = -\frac{1}{4} \Rightarrow U = 4\left(-\frac{1}{4}\right) + 1 = 0$$

$$x = 6 \Rightarrow U = 4(6) + 1 = 25$$

$$I = \frac{1}{16} \int_0^{25} U^{3/2} - U^{1/2} dU = \frac{1}{16} \left[ \frac{2}{5} U^{5/2} - \frac{2}{3} U^{3/2} \right]_0^{25}$$

$$= \frac{1}{16} \left( \frac{2}{5} (25)^{5/2} - \frac{2}{3} (25)^{3/2} \right)$$

$$= \frac{875}{12}$$

$$\text{So } \int_{-\frac{1}{4}}^6 x\sqrt{4x+1} dx = \frac{875}{12}$$





6 The line  $L$  has equation

$$5y + 12x = 298$$

A circle,  $C$ , has centre  $(7, 9)$

$L$  is a tangent to  $C$ .

6 (a) Find the coordinates of the point of intersection of  $L$  and  $C$ .

Fully justify your answer.

[5 marks]

$$5y + 12x = 298 \quad \textcircled{1} \Rightarrow y = -\frac{12}{5}x + \frac{298}{5} \quad (\text{gradient} = -\frac{12}{5})$$

$$\text{Equation of a circle: } (x-a)^2 + (y-b)^2 = r^2$$

$$\frac{d}{dx} [(x-a)^2 + (y-b)^2] = 0$$

$$\Rightarrow 2(x-a) + 2(y-b) \frac{dy}{dx} = 0$$

$$\Rightarrow \frac{dy}{dx} = \frac{a-x}{y-b} \quad (\text{gradient of tangent})$$

$$\text{As the circle has centre } (7, 9), \frac{dy}{dx} = \frac{7-x}{y-9}$$

$$\frac{7-x}{y-9} = -\frac{12}{5} \Rightarrow -73 = -12y + 5x \quad \textcircled{2}$$

Solving  $\textcircled{1}$  and  $\textcircled{2}$  simultaneously with a calculator

$$x = 19 \text{ and } y = 14$$

So the point of intersection is  $(19, 14)$



6 (b) Find the equation of C.

[3 marks]

$$(x-7)^2 + (y-9)^2 = r^2$$

$$(19-7)^2 + (14-9)^2 = r^2$$

$$12^2 + 5^2 = 169$$

$$(x-7)^2 + (y-9)^2 = 169$$

$$\text{or } (x-7)^2 + (y-9)^2 = 13^2$$

Turn over for the next question

Turn over ►



7  $a$  and  $b$  are two positive irrational numbers.

The sum of  $a$  and  $b$  is rational.

The product of  $a$  and  $b$  is rational.

Caroline is trying to prove  $\frac{1}{a} + \frac{1}{b}$  is rational.

Here is her proof:

Step 1  $\frac{1}{a} + \frac{1}{b} = \frac{2}{a+b}$

Step 2 2 is rational and  $a + b$  is non-zero and rational.

Step 3 Therefore  $\frac{2}{a+b}$  is rational.

Step 4 Hence  $\frac{1}{a} + \frac{1}{b}$  is rational.

7 (a) (i) Identify Caroline's mistake.

[1 mark]

The mistake is in Step 1 as  
 $\frac{1}{a} + \frac{1}{b} = \frac{a+b}{ab}$

7 (a) (ii) Write down a correct version of the proof.

[2 marks]

$$\frac{1}{a} + \frac{1}{b} = \frac{a+b}{ab}$$

As  $a+b$  and  $ab$  are both rational,  $\frac{1}{a} + \frac{1}{b}$  is rational



- 7 (b) Prove by contradiction that the difference of any rational number and any irrational number is irrational.

[4 marks]

Assume that the difference between a rational and an irrational is rational.

$$\frac{a}{b} - x = \frac{c}{d} \quad \text{where } a, b, c \text{ and } d \in \mathbb{Z}$$

and  $b, d \neq 0$   
and  $x$  is irrational

$$x = \frac{a}{b} - \frac{c}{d}$$

$$= \frac{ad - bc}{bd}$$

Therefore,  $x$  is rational. This yields a contradiction and so the difference of any rational number and any irrational number is irrational.

Turn over ►



**There are no questions printed on this page**

*Do not write  
outside the  
box*

**DO NOT WRITE ON THIS PAGE  
ANSWER IN THE SPACES PROVIDED**

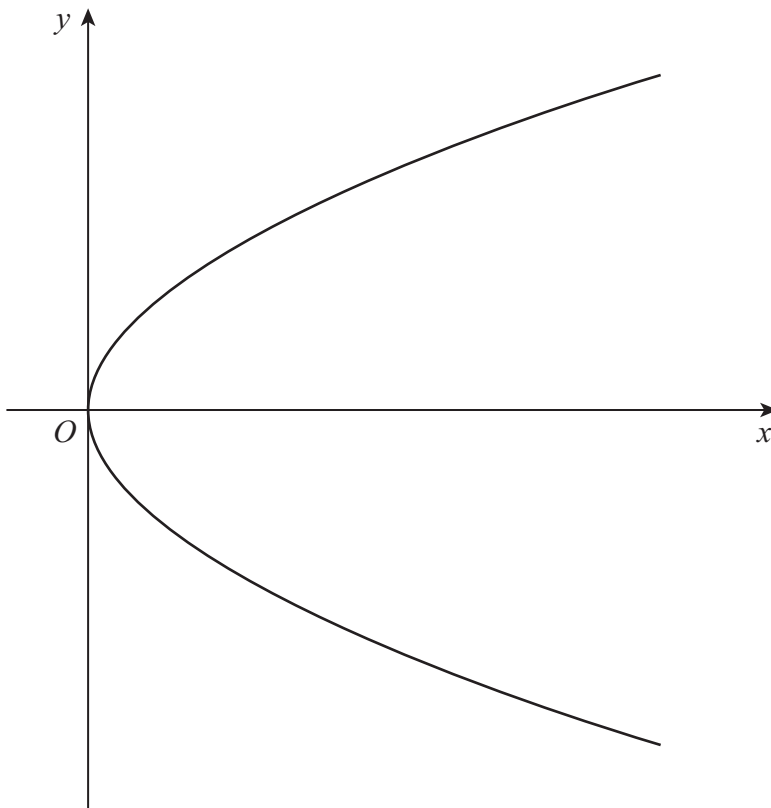


**8** The curve defined by the parametric equations

$$x = t^2 \text{ and } y = 2t \quad -\sqrt{2} \leq t \leq \sqrt{2}$$

is shown in **Figure 1** below.

**Figure 1**



**8 (a)** Find a Cartesian equation of the curve in the form  $y^2 = f(x)$

**[2 marks]**

$y^2 = (2t)^2 = 4t^2 = 4x$  so  $y^2 = 4x$

---



---



---



---



---



---



---



---



---



---

Turn over ►

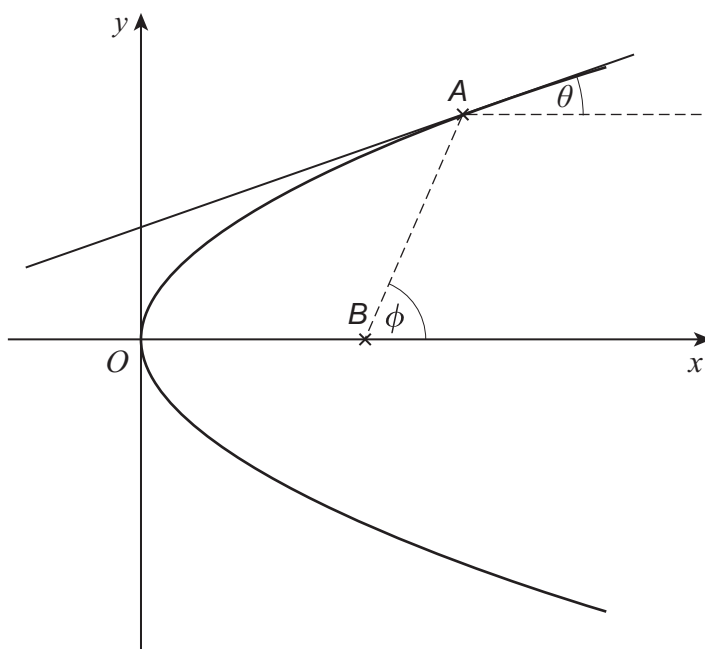


8 (b) The point  $A$  lies on the curve where  $t = a$

The tangent to the curve at  $A$  is at an angle  $\theta$  to a line through  $A$  parallel to the  $x$ -axis.

The point  $B$  has coordinates  $(1, 0)$

The line  $AB$  is at an angle  $\phi$  to the  $x$ -axis.



8 (b) (i) By considering the gradient of the curve, show that

$$\tan \theta = \frac{1}{a}$$

[3 marks]

$$\frac{dy}{dx} = \frac{dy/dt}{dx/dt} = \frac{2}{2t} = \frac{1}{t}$$

$$\frac{dy}{dx} \Big|_{t=a} = \frac{1}{a}$$

The gradient of the line is equal to the tangent of  $\theta$  so  $\tan \theta = \frac{1}{a}$



8 (b) (ii) Find  $\tan \phi$  in terms of  $a$ .

[2 marks]

$$A(a^2, 2a) \text{ and } B(1, 0)$$

$$\text{Gradient of } AB: \frac{\Delta y}{\Delta x} = \frac{2a-0}{a^2-1} = \frac{2a}{a^2-1}$$

$$\text{So } \tan \phi = \frac{2a}{a^2-1}$$

8 (b) (iii) Show that  $\tan 2\theta = \tan \phi$

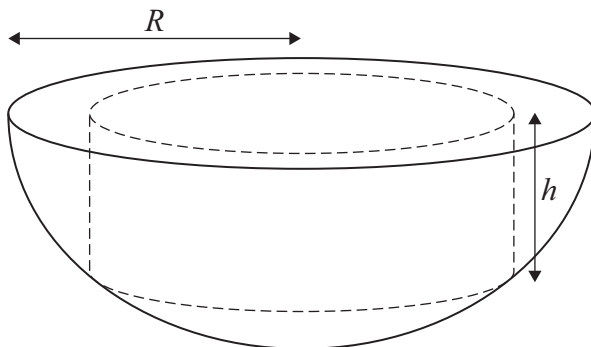
[3 marks]

$$\begin{aligned} \tan 2\theta &= \frac{2 \tan \theta}{1 - \tan^2 \theta} \\ &= \frac{2/a}{1 - \frac{1}{a^2}} = \frac{2a}{a^2-1} \\ &= \tan \phi \end{aligned}$$

Turn over ►



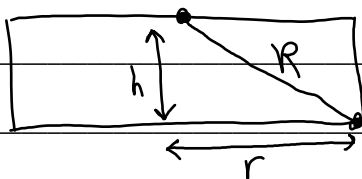
- 9** A cylinder is to be cut out of the circular face of a solid hemisphere.  
The cylinder and the hemisphere have the same axis of symmetry.  
The cylinder has height  $h$  and the hemisphere has a radius of  $R$ .



- 9 (a)** Show that the volume,  $V$ , of the cylinder is given by

$$V = \pi R^2 h - \pi h^3$$

[3 marks]



$$h^2 + r^2 = R^2 \Rightarrow r^2 = R^2 - h^2$$

$$V = \pi r^2 h = \pi (R^2 - h^2) h$$

$$= \pi R^2 h - \pi h^3$$



9 (b) Find the maximum volume of the cylinder in terms of  $R$ .

Fully justify your answer.

$$\frac{dV}{dh} = \frac{d}{dh} (\pi R^2 h - \pi h^3) = \pi R^2 - 3\pi h^2$$

[7 marks]

$$\frac{dV}{dh} = 0 \Rightarrow \text{Stationary point}$$

$$\Rightarrow \pi R^2 - 3\pi h^2 = 0$$

$$\Rightarrow R^2 = 3h^2$$

$$\Rightarrow h = \frac{R}{\sqrt{3}}$$

$$V_{\max} = \pi R^2 \left(\frac{R}{\sqrt{3}}\right) - \pi \left(\frac{R}{\sqrt{3}}\right)^3 = \frac{2\sqrt{3}\pi R^3}{9}$$

$$\left. \frac{d^2V}{dh^2} = -6\pi h \right|_{h=\frac{R}{\sqrt{3}}} < 0$$

So the volume calculated is a maximum

Turn over for Section B

Turn over ►



**Section B**Answer **all** questions in the spaces provided.**10** A vehicle is driven at a constant speed of  $12 \text{ m s}^{-1}$  along a straight horizontal road.

Only one of the statements below is correct.

Identify the correct statement.

Tick (✓) **one** box.**[1 mark]**

The vehicle is accelerating

The vehicle's driving force exceeds the total force resisting its motion

The resultant force acting on the vehicle is zero

The resultant force acting on the vehicle is dependent on its mass

**11** A number of forces act on a particle such that the resultant force is  $\begin{pmatrix} 6 \\ -3 \end{pmatrix} \text{ N}$ One of the forces acting on the particle is  $\begin{pmatrix} 8 \\ -5 \end{pmatrix} \text{ N}$ 

Calculate the total of the other forces acting on the particle.

Circle your answer.

**[1 mark]**

$\begin{pmatrix} 2 \\ -2 \end{pmatrix} \text{ N}$

$\begin{pmatrix} 14 \\ -8 \end{pmatrix} \text{ N}$

$\begin{pmatrix} -2 \\ 2 \end{pmatrix} \text{ N}$

$\begin{pmatrix} -14 \\ 8 \end{pmatrix} \text{ N}$



12

A particle,  $P$ , is moving with constant velocity  $8\mathbf{i} - 12\mathbf{j}$

A second particle,  $Q$ , is moving with constant velocity  $a\mathbf{i} + 9\mathbf{j}$

$Q$  travels in a direction which is parallel to the motion of  $P$ .

Find  $a$ .

Circle your answer.

[1 mark]

$-6$

$-5$

$5$

$6$

$$\begin{pmatrix} -6 \\ 9 \end{pmatrix} \times -\frac{4}{3} = \begin{pmatrix} 8 \\ -12 \end{pmatrix}$$

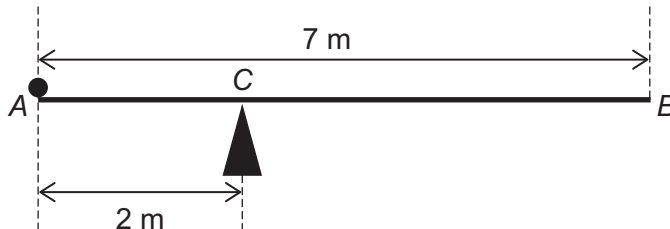
Turn over for the next question

$\therefore$  parallel

Turn over ►



- 13** A uniform rod,  $AB$ , has length 7 metres and mass 4 kilograms.  
 The rod rests on a single fixed pivot point,  $C$ , where  $AC = 2$  metres.  
 A particle of weight  $W$  newtons is fixed at  $A$ , as shown in the diagram.



The system is in equilibrium with the rod resting horizontally.

- 13 (a)** Find  $W$ , giving your answer in terms of  $g$ . **[2 marks]**

$2m$      $1.5m$     Anticlockwise moments  
 $\longleftrightarrow$     $\longleftrightarrow$     = clockwise moments

$2W = 1.5(4g)$   
 $W = 1.5(2g)$   
 $W = 3g$

- 13 (b)** Explain how you have used the fact that the rod is uniform in part (a). **[1 mark]**

The rod is uniform its weight acts at the centre

---



---



- 14 At time  $t$  seconds a particle,  $P$ , has position vector  $\mathbf{r}$  metres, with respect to a fixed origin, such that

$$\mathbf{r} = (t^3 - 5t^2)\mathbf{i} + (8t - t^2)\mathbf{j}$$

- 14 (a) Find the exact speed of  $P$  when  $t = 2$

$$\frac{d}{dt} \mathbf{r} = \mathbf{v} = \frac{d}{dt} \begin{pmatrix} t^3 - 5t^2 \\ 8t - t^2 \end{pmatrix} = \begin{pmatrix} 3t^2 - 10t \\ 8 - 2t \end{pmatrix} \quad [4 \text{ marks}]$$

$$\mathbf{v}|_{t=2} = \begin{pmatrix} 12 - 20 \\ 8 - 4 \end{pmatrix} = \begin{pmatrix} -8 \\ 4 \end{pmatrix}$$

$$\text{speed} = |\mathbf{v}| = \sqrt{(-8)^2 + (4)^2} = 4\sqrt{5} \text{ ms}^{-1}$$

- 14 (b) Bella claims that the magnitude of acceleration of  $P$  will never be zero.

Determine whether Bella's claim is correct.

Fully justify your answer.

$$\mathbf{a} = \begin{pmatrix} 6t - 10 \\ -2 \end{pmatrix} \quad [3 \text{ marks}]$$

$$|\mathbf{a}| = \sqrt{(6t - 10)^2 + 2^2}$$

so  $|\mathbf{a}| \geq 2$  for all  $t$ . This means that the magnitude of the acceleration is never 0 so Bella's claim is incorrect

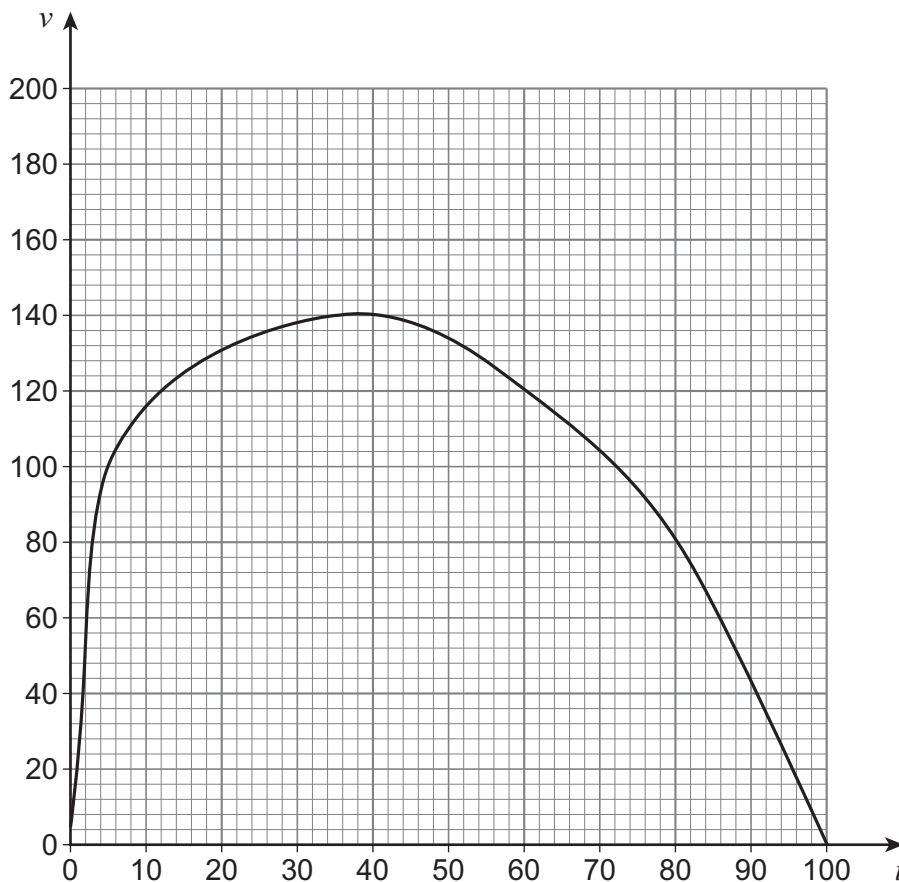
Turn over ►



Do not write  
outside the  
box

15

A particle is moving in a straight line with velocity  $v \text{ m s}^{-1}$  at time  $t$  seconds as shown by the graph below.



15 (a)

Use the trapezium rule with four strips to estimate the distance travelled by the particle during the time period  $20 \leq t \leq 100$

[4 marks]

$h = 20$

---

$y_0 = 131, y_1 = 140, y_2 = 120, y_3 = 80$  and  $y_4 = 0$

---

$\text{Area} = \frac{h}{2} (y_0 + y_4 + 2(y_1 + y_2 + y_3))$

---

$= 8110 \text{ m}$

---



---



---



---



---



---



**15 (b)**

Over the same time period, the curve can be very closely modelled by a particular quadratic.

Explain how you could find an alternative estimate using this quadratic.

**[1 mark]**

You could integrate the quadratic between the limits 20 and 100

**Turn over for the next question**

**Turn over ►**

16

Two particles  $A$  and  $B$  are released from rest from different starting points above a horizontal surface.

$A$  is released from a height of  $h$  metres.

$B$  is released at a time  $t$  seconds after  $A$  from a height of  $kh$  metres, where  $0 < k < 1$

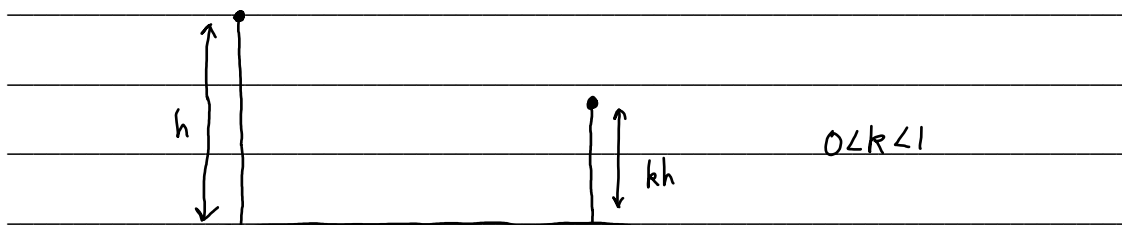
Both particles land on the surface 5 seconds after  $A$  was released.

Assuming any resistance forces may be ignored, prove that

$$t = 5(1 - \sqrt{k})$$

Fully justify your answer.

[5 marks]



$$s = ut + \frac{1}{2}at^2$$

$$h = \frac{1}{2}g t_1^2$$

$$h = \frac{25}{2}g$$

$$kh = \frac{25}{2}kg \quad (1)$$

$$kh = \frac{1}{2}g(t_1 - t)^2$$

$$kh = \frac{1}{2}g(5 - t)^2 \quad (2)$$

Equating (1) and (2) :

$$\frac{25}{2}kg = \frac{1}{2}g(5 - t)^2$$

$$25k = (5 - t)^2$$

$$5\sqrt{k} = 5 - t$$

$$(0 < t < 5 \text{ so } 5\sqrt{k} = 5 - t)$$

$$t = 5 - 5\sqrt{k}$$

$$t = 5(1 - \sqrt{k})$$





17

A ball is projected forward from a fixed point,  $P$ , on a horizontal surface with an initial speed  $u \text{ m s}^{-1}$ , at an acute angle  $\theta$  above the horizontal.

The ball needs to first land at a point at least  $d$  metres away from  $P$ .

You may assume the ball may be modelled as a particle and that air resistance may be ignored.

Show that

$$\sin 2\theta \geq \frac{dg}{u^2}$$

[6 marks]

$$V = U + at \Rightarrow t = \frac{V-U}{a}$$

$$\Rightarrow t = \frac{0 - u \sin \theta}{-g} = \frac{u \sin \theta}{g} \quad (\text{Time to vertex of projectile})$$

$$\text{range} = d = (u \cos \theta) t$$

$$= (u \cos \theta) \frac{2u \sin \theta}{g} = \frac{2u^2 \sin \theta \cos \theta}{g}$$

$$= \frac{u^2 \sin 2\theta}{g}$$

$$\text{range} = d$$

$$d \leq \frac{u^2 \sin 2\theta}{g}$$

$$dg \leq u^2 \sin 2\theta$$

$$\sin 2\theta \geq \frac{dg}{u^2}$$



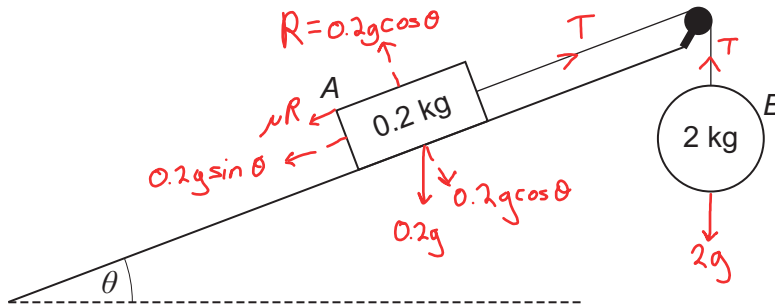


18 Block A, of mass 0.2 kg, lies at rest on a rough plane.

The plane is inclined at an angle  $\theta$  to the horizontal, such that  $\tan \theta = \frac{7}{24}$

A light inextensible string is attached to A and runs parallel to the line of greatest slope until it passes over a smooth fixed pulley at the top of the slope.

The other end of this string is attached to particle B, of mass 2 kg, which is held at rest so that the string is taut, as shown in the diagram below.



18 (a) B is released from rest so that it begins to move vertically downwards with an acceleration of  $\frac{543}{625} g \text{ m s}^{-2}$

Show that the coefficient of friction between A and the surface of the inclined plane is 0.17

[8 marks]

$$R(\nearrow): T - \mu R - 0.2g \sin \theta = 0.2 \left( \frac{543}{625} g \right) \quad (1)$$

$$R(\uparrow): 2g - T = 2 \left( \frac{543}{625} g \right) \quad (2)$$

Adding (1) and (2):

$$0.2g - \mu R - 0.2g \sin \theta = 2.2 \left( \frac{543}{625} g \right)$$

$$0.2g - \mu(0.2g \cos \theta) - 0.2g \sin \theta = 2.2 \left( \frac{543}{625} g \right)$$

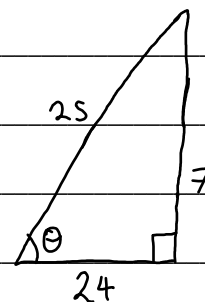
$$0.2 - \mu(0.2 \cos \theta) - 0.2 \sin \theta = 2.2 \left( \frac{543}{625} \right)$$

$$\mu = \frac{2.2 \left( \frac{543}{625} \right) - 0.2 + 0.2 \sin \theta}{0.2 \cos \theta}$$

$$= \frac{2.2 \left( \frac{543}{625} \right) - 0.2 + 0.2 \left( \frac{7}{25} \right)}{0.2 \left( \frac{24}{25} \right)}$$

$$= 0.17$$

$$\mu = 0.17$$



$$\text{So } \sin \theta = \frac{7}{25}$$

$$\cos \theta = \frac{24}{25}$$





**18 (b)** In this question use  $g = 9.81 \text{ m s}^{-2}$

When A reaches a speed of  $0.5 \text{ m s}^{-1}$  the string breaks.

**18 (b) (i)** Find the distance travelled by A after the string breaks until first coming to rest.

**[4 marks]**

$$v^2 = u^2 + 2as \Rightarrow \frac{v^2 - u^2}{2a} = s$$

$$s = \frac{0 - 0.5^2}{-2(\mu g \cos \theta + g \sin \theta)} = \frac{0.5^2}{2g(0.17(\frac{24}{25}) + \frac{7}{25})} = 0.0288 \text{ m}$$

**18 (b) (ii)** State an assumption that could affect the validity of your answer to part (b)(i).

**[1 mark]**

A does not reach the pulley before coming to rest



**Turn over for the next question**

*Do not write  
outside the  
box*

**DO NOT WRITE ON THIS PAGE  
ANSWER IN THE SPACES PROVIDED**

**Turn over ►**



- 19** A particle moves so that its acceleration,  $a \text{ m s}^{-2}$ , at time  $t$  seconds may be modelled in terms of its velocity,  $v \text{ m s}^{-1}$ , as

$$a = -0.1v^2$$

The initial velocity of the particle is  $4 \text{ m s}^{-1}$

- 19 (a)** By first forming a suitable differential equation, show that

$$v = \frac{20}{5+2t}$$

[6 marks]

$$a = -0.1v^2 \Rightarrow \frac{dv}{dt} = -0.1v^2$$

$$\Rightarrow \int \frac{dv}{v^2} = \int -0.1 dt$$

$$\Rightarrow -v^{-1} = -0.1t + C$$

$$\Rightarrow v = \frac{1}{0.1t - C}$$

$$v \Big|_{t=0} = -\frac{1}{C} = 4 \Rightarrow C = -\frac{1}{4}$$

$$v = \frac{1}{0.1t + \frac{1}{4}}$$

$$v = \frac{20}{5+2t}$$



19 (b) Find the acceleration of the particle when  $t = 5.5$

[2 marks]

$$v = \frac{20}{5 + 2(5.5)} = 1.25 \text{ ms}^{-1}$$

$$a = -0.1v^2 = -0.1(1.25)^2$$

$$= -0.15625 \text{ ms}^{-2}$$

END OF QUESTIONS



**There are no questions printed on this page**

*Do not write  
outside the  
box*

**DO NOT WRITE ON THIS PAGE  
ANSWER IN THE SPACES PROVIDED**





